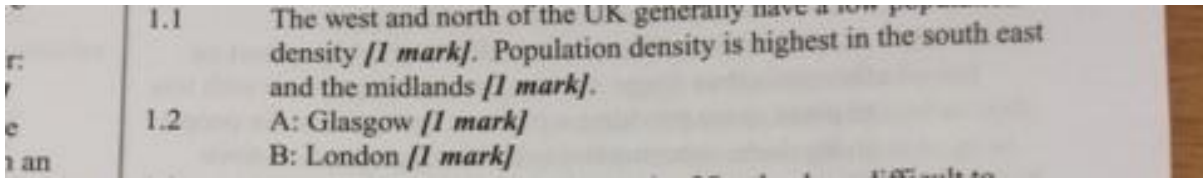


## UK Cities Homework Answers 1

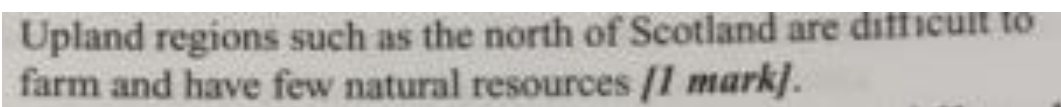
Describe the pattern of population density in the UK (2)



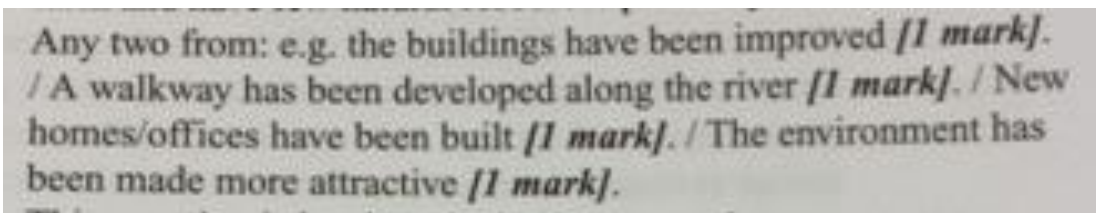
2) Name the cities labelled A and B in figure 1 (2)

A: GLASGOW B: LONDON

3) Suggest 1 reason why the areas labelled C on the map has a low population density? (1)



4) Using figure 2, identify two features of the regeneration project



5) Using an example of a UK urban regeneration project that you have studied, explain how the area has been improved (4)

